

Matoshri Academy, Eklahare, Nashik

Assesment-I (2018-2019) CBSE STD-2

R. No. _____ Name: _____ Div: _____ Date: _____

Subject-Maths Supervisor Sign. _____ Checkers Sign: _____

Ques.No	1	2	3	4	5	6	7	8	9	10	Mark Obtained	
Marks:												

Q. 1) Fill in the blanks.

3

Ramu, a woodcutter, uses 10 sticks to make 1 bundle.

1) 4 bundles will have sticks

2) 3 bundles will have sticks

3) 8 bundles will have sticks

Q. 2) Insert $>$, $<$, $=$ sign

2

1) 31 13

3) 99 89

2) 46 48

4) 78 78


Q. 3) Match the following objects.

4

Objects

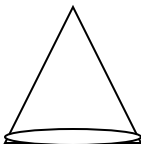
Name

1




a) Cone

2



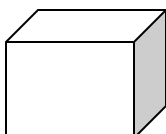
b) Rectangle

3



c) Cylinder

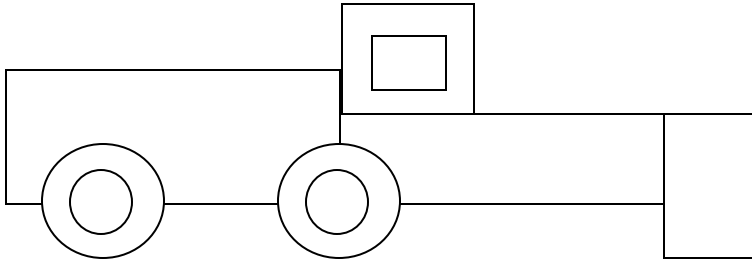
4



d) Cube

Q. 4) Count the shape

3



- 1) There are circles
2) There are squares
3) There are rectangles

Q. 5) Counting by two's , Write numbers starting from

2

- a) 48
b) 84

Q.6) Look at the patterns and fill the blanks

2

- 1) _____
- 2) _____

Q. 7) Solve the example of addition.

2

$$\begin{array}{r} 1) 32 \\ + 12 \\ \hline \end{array}$$

$$\begin{array}{r} 2) 342 \\ + 35 \\ \hline \end{array}$$

Q. 8) Solve the example subtraction

2

$$\begin{array}{r} 1) 49 \\ - 15 \\ \hline \end{array}$$

$$\begin{array}{r} 2) 964 \\ - 31 \\ \hline \end{array}$$